





Quiz 2  
Fall 2009



Name \_\_\_\_\_

Section \_\_\_\_\_

1. (12 Pts) \_\_\_\_\_

2. (12 Pts) \_\_\_\_\_

3. (5 Pts) \_\_\_\_\_

4. (26 Pts) \_\_\_\_\_

5. (20 Pts) \_\_\_\_\_

6. (25 Pts) \_\_\_\_\_

**Total** \_\_\_\_\_

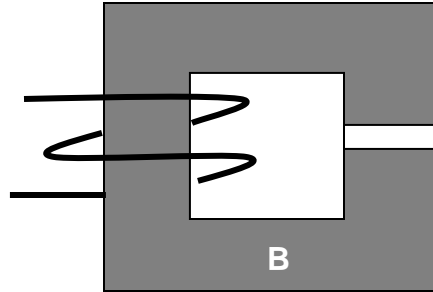
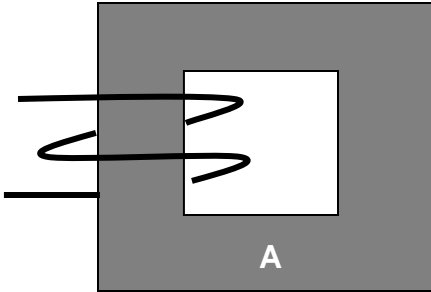
Notes:

- 1. **Please read over all questions before you begin your work. There may be some information in a later question that helps you with an earlier question.**
- 2. For short answer questions, you may add some comments to justify your answer.
- 3. Make sure your calculator is set to perform trigonometric functions in radians & not degrees & use 4 significant digits.



**MULTIPLE CHOICE AND SHORT ANSWER QUESTIONS**

**1. Magnetic Fields (18 points)**



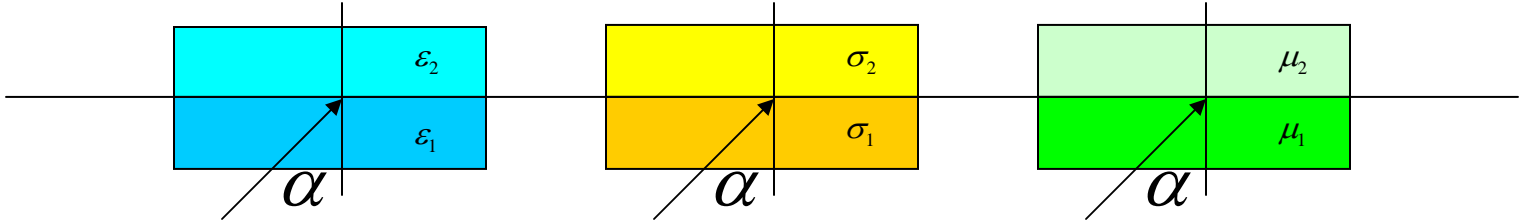
A square magnetic core is made with and without a gap, as shown. Both cores are made with a standard magnetic material such as soft iron and all dimensions and windings are identical, except for the gap. The saturation field for the core material is  $B_{max}$ . The effective length of the core in both cases is approximately  $l_c$  and the gap size is  $l_g$ . The permeability of the core  $\mu \gg \mu_o$  so that  $\frac{l_c}{\mu} \ll \frac{l_g}{\mu_o}$ . The cross-sectional area of the core materials is  $A$ .

- a. (4 pts) Which of the two cases will have the larger inductance  $L$ ?
  
- b. (4 pts) Which of the two cases can store the largest energy?
  
- c. (4 pts) Which of the following statements are true? Circle the letters of the true statements.
  - i. The force on the gap is in the direction to reduce the gap spacing  $l_g$ .
  - ii. The force on the gap is inversely proportional to the area of the gap.
  - iii. The force on the gap is inversely proportional to the gap spacing  $l_g$ .
  - iv. The force on the gap is proportional to  $B_{max}$



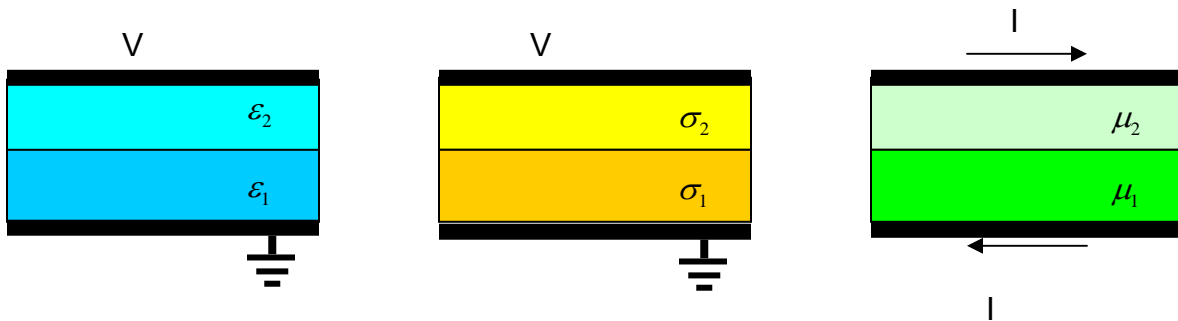
2. Boundary Conditions (12 points)

The boundary conditions for E fields, B fields and current density J are essentially identical at the interface between two materials.



Consider the three cases shown above with  $\epsilon_1 > \epsilon_2$ ,  $\sigma_1 \gg \sigma_2$  and  $\mu_1 \gg \mu_2$ .

- a. (6 points) Given that the angle is  $\alpha$  in the lower region in each case, determine the corresponding angle  $\beta$  (relative to the normal) in the upper region.
  
- b. (6 points) Now assume the two materials, for each case, are found between conducting contacts at the top and the bottom as shown. Determine the capacitance, resistance and inductance. Note the voltages and currents for each case. The inductor case has currents directed right and left. The width and depth of the plates is  $w$ , and the separation between the plates is  $d$ .





3. Cultural Question (5 points)

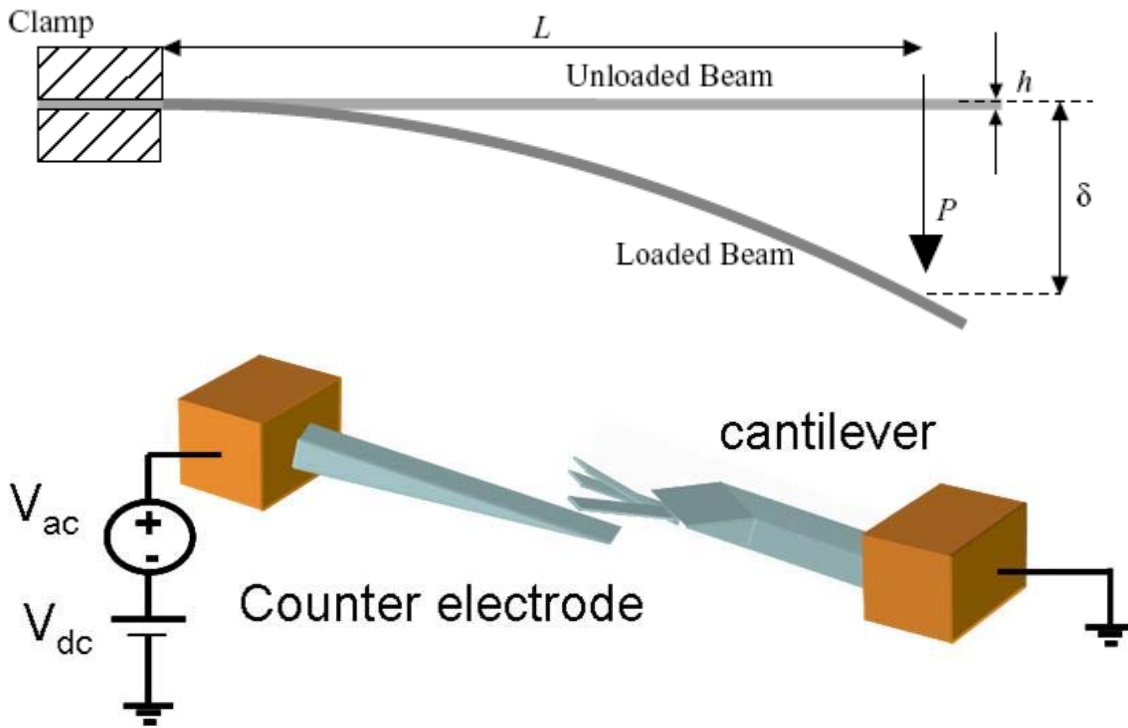


These objects were created by Scott Amron a couple of years ago. Explain what he had in mind in each case. (source: <http://www.dielectric.org>)

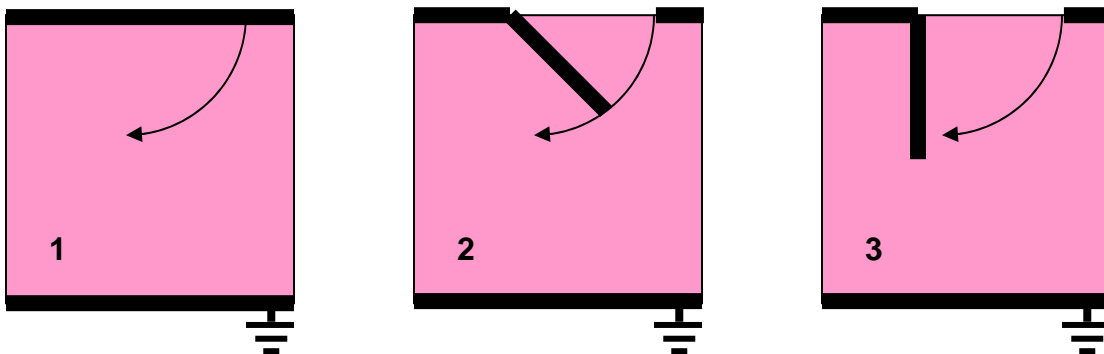


### 4. Electric Field and Capacitance (24 points)

This problem addresses several aspects of electric fields in the context of the small cantilever beams used in accelerometers. A generic cantilever beam is shown below along with a diagram showing how the capacitance of the beam can be used to measure its motion.



The problem considered here is inspired by these figures, but the configuration is rather different. Assume that there is an approximately parallel plate capacitor structure that has a movable element in it (like the cantilever), with the following geometry.



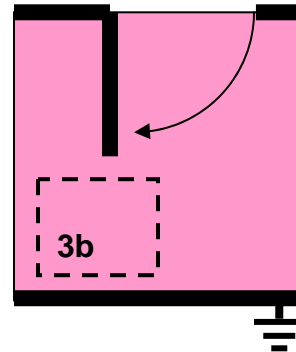
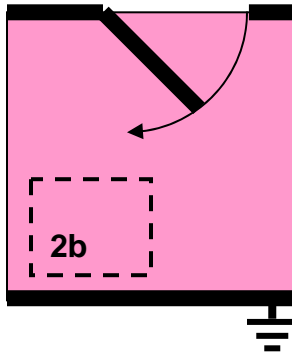
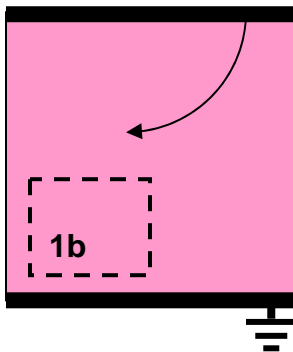
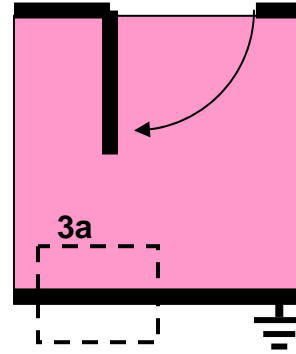
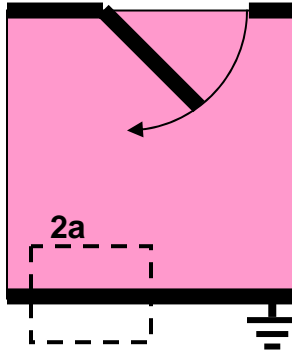
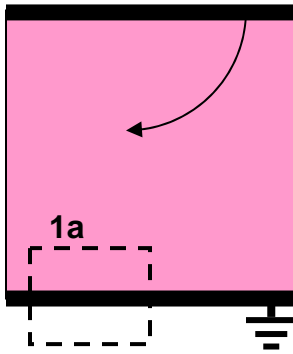
Note that a section of the top electrode opens up, which mimics the changes that occur when the top electrode is a cantilever beam. A DC voltage is applied to the top electrode. The insulator is air (or the beam would not be able to move) and the total dimensions of the structure are  $0.3\text{mm}$  by  $0.3\text{mm}$ .





d. **Gauss' Law** (3 points) For the three configurations, two Gaussian surfaces (shown dashed) are used to evaluate the flux integral from Gauss' Law

$$\oint \vec{D} \cdot d\vec{S}.$$



For the six distinct cases, put the flux integrals in order from largest to smallest. If some are equal, indicate that too.

--	--	--	--	--	--



Diagram showing a grid of data with boundaries labeled A, B, and C. The grid is a 112x26 table with columns labeled A through Z and AA through AE. The data is organized into fields and waves, with boundaries A, B, and C indicated by arrows. The grid is divided into several sections by horizontal lines.

A	B	C
0.333333	10	10
0.333333	9.666667	9.666667
0.333333	9.333333	9.333333
0.333333	9	9
0.333333	8.666667	8.666667
0.333333	8.333333	8.333333
0.333333	8	8
0.333333	7.666667	7.666667
0.333333	7.333333	7.333333
0.333333	7	7
0.333333	6.666667	6.666667
0.333333	6.333333	6.333333
0.333333	6	6
0.333333	5.666667	5.666667
0.333333	5.333333	5.333333
0.333333	5	5
0.333333	4.666667	4.666667
0.333333	4.333333	4.333333
0.333333	4	4
0.333333	3.666667	3.666667
0.333333	3.333333	3.333333
0.333333	3	3
0.333333	2.666667	2.666667
0.333333	2.333333	2.333333
0.333333	2	2
0.333333	1.666667	1.666667
0.333333	1.333333	1.333333
0.333333	1	1
0.333333	0.666667	0.666667
0.333333	0.333333	0.333333
0.333333	0	0
0.333333	5	5

Ave

The data along the lower boundary is shown in column A; the left boundary in column B; the right boundary in column C. This permits the full set of significant digits to be seen.





4. A B C

0.398949	10	10
0.398949	9.789456	9.776112
0.399166	9.575505	9.551006
0.399593	9.355093	9.323297
0.400216	9.125737	9.091371
0.401011	8.885584	8.853436
0.401952	8.633384	8.607649
0.403004	8.368413	8.352253
0.404128	8.090392	8.085724
0.405279	7.799408	7.806892
0.406413	7.495836	7.515022
0.407482	7.180285	7.20986
0.408442	6.853529	6.891617
0.409252	6.516457	6.560915
0.409877	6.170027	6.218688
0.410291	5.815217	5.86607
0.410479	5.452996	5.504297
0.410437	5.084294	5.134608
0.410173	4.709981	4.758191
0.409709	4.330857	4.376131
0.409075	3.947644	3.989399
0.408311	3.560985	3.598836
0.407463	3.17145	3.205165
0.406581	2.779534	2.808994
0.405714	2.385672	2.410836
0.404909	1.990243	2.011118
0.404209	1.593579	1.610199
0.403651	1.19597	1.208382
0.403262	0.79768	0.805927
0.403063	0.398949	0.403063
0.403063	0	0
0.405294	5.517876	5.533389

Ave ←

Half open case

A B C

0.478175	10	10
0.478175	9.9557	9.683055
0.477591	9.908847	9.367896
0.476415	9.85675	9.055805
0.474636	9.796441	8.747306
0.472241	9.72453	8.442199
0.469227	9.637062	8.139735
0.465602	9.529393	7.838843
0.461394	9.396116	7.538318
0.456654	9.231114	7.236961
0.45145	9.027844	6.933669
0.445872	8.780022	6.627485
0.440021	8.482868	6.317623
0.434004	8.13484	6.003468
0.42793	7.739262	5.684576
0.421902	7.304356	5.360657
0.416014	6.840567	5.031565
0.410348	6.357865	4.697276
0.404974	5.864307	4.357874
0.399948	5.365724	4.013532
0.395312	4.865991	3.664499
0.3911	4.367477	3.311082
0.387334	3.871488	2.953636
0.384028	3.37861	2.592553
0.381191	2.888964	2.22825
0.378828	2.402377	1.861164
0.376939	1.918494	1.491745
0.375524	1.436855	1.120453
0.374582	0.956935	0.747753
0.374112	0.478175	0.374112
0.374112	0	0
0.424375	6.370935	5.207196

Ave ←

Fully open case

**5. Gauss' Law and E Fields (20 points)**

A cylindrical charge distribution is given by  $\rho_v(r) = \rho_{vo}$  for  $0 \leq r \leq a$ ;  $\rho_v(r) = -\rho_{vo}$  for  $a \leq r \leq 2a$ ; the regions  $2a \leq r < 3a$  and  $3a < r < \infty$  are charge free; and there is a surface charge density at  $r = 3a$  so that the total charge per unit length is zero.

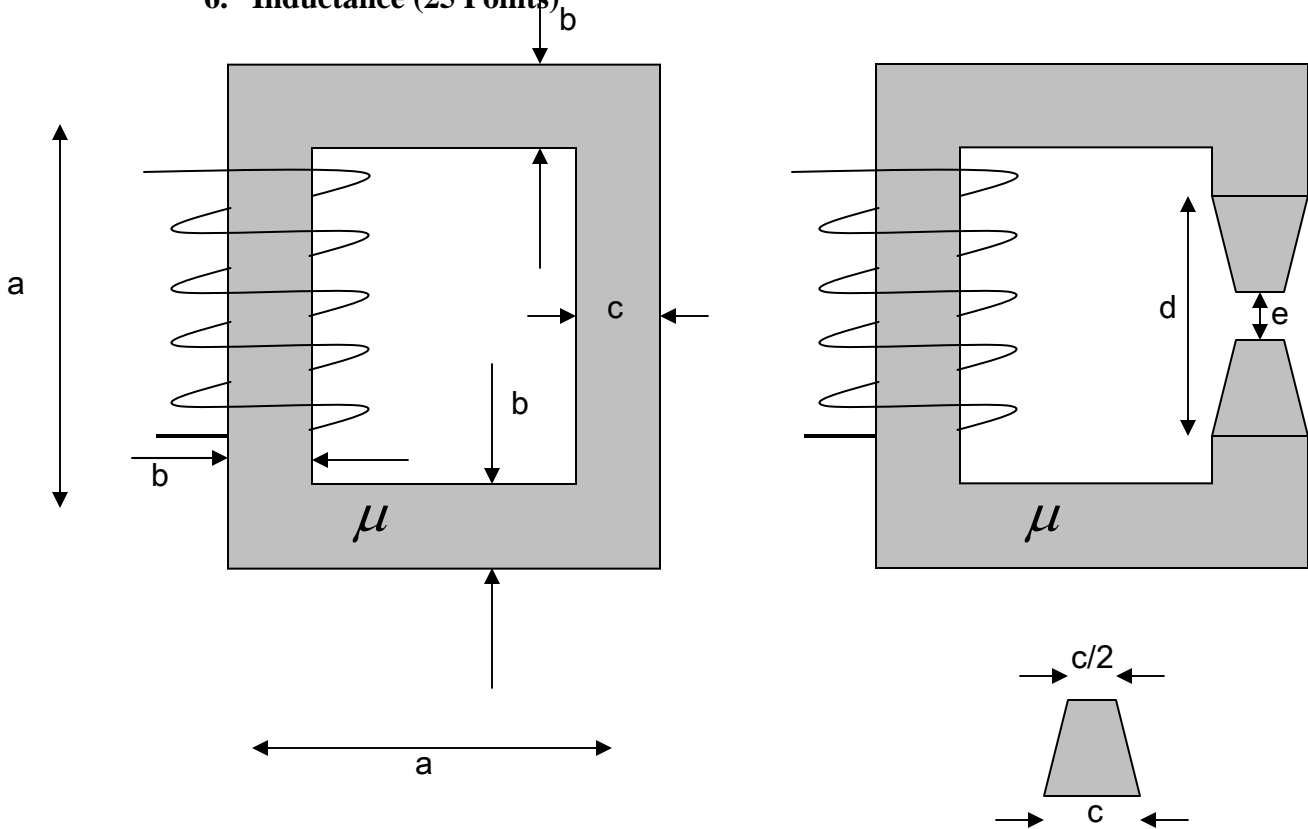
- a. (8 points) Determine the total charge per unit length  $Q_1$  in the region  $0 \leq r \leq a$ ; the total charge per unit length  $Q_2$  in the region  $a \leq r \leq 2a$ ; and the surface charge density  $\rho_s$  at  $r = 3a$ .

- b. (8 points) Determine the electric flux density  $\vec{D}(r)$  for all values of  $r$ .

- c. (4 points) Evaluate the electric field  $\vec{E}(r) = \vec{E}(3a)$  at  $r = 3a$ .



6. Inductance (25 Points)



Consider the two cores shown above. For both cases, the depth into the page of each part of the core is equal to  $w$ . For the one at the left, three legs have the same thickness  $b$  with the fourth having a thickness  $c$ . For the one at the right, again, three legs have the same thickness  $b$ . However, the 4<sup>th</sup> leg is more complex.

- a. (5 points) Determine the reluctance, the flux and the inductance of the configuration at the left. Also, draw the magnetic circuit diagram.

