

Homework #5
Number Systems, Boolean Algebra and Logic Gates
Due: Monday December 3rd

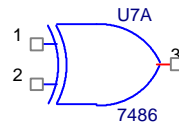
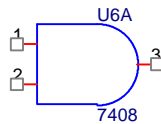
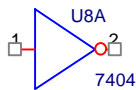
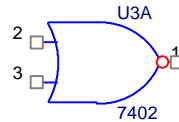
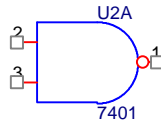
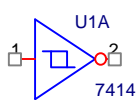
1. Number Systems: Convert the decimal numbers to binary and vice-versa (do not look them up in the table.):

Binary	Decimal
0110	
1011	
	9
	13

2. Boolean Algebra: Determine which boolean operation is represented by the following table:

B	A	Result
0	0	1
0	1	1
1	0	1
1	1	0

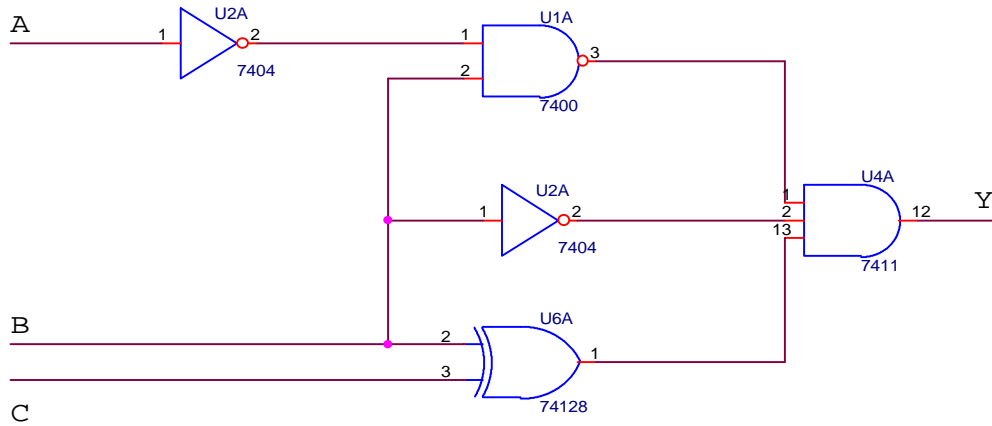
3. Logic Gates: What kind of logic gate is each of these devices?:



4. Boolean Algebra: Draw the circuit for this Boolean expression

$$Y = \overline{(\overline{A} + B)C}$$

5. Fill in the truth table for the circuit below.



C	B	A	Y
0	0	0	
0	0	1	
0	1	0	
0	1	1	
1	0	0	
1	0	1	
1	1	0	
1	1	1	

Some reference materials:

<http://www.ied.edu.hk/has/phys/de/de-ba.htm>

<http://www.dgp.utoronto.ca/people/van/courses/csc258/bool.html>

6. Design a monostable multivibrator that outputs a single 15msec pulse using a 555 timer. Perform a PSpice simulation of your circuit to show that it works. Some useful links follow.

<http://www.uoguelph.ca/~antoon/circ/monovib.htm>

<http://www.hobby-electronics.com/MonostableMultivibrator.htm>